



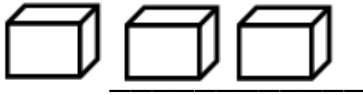
CREAMHILL SCHOOLS – MULAGO

P.1 MATHEMATICS

Name: _____ Stream _____

SECTION A

1. Count and write



2. Add

$$4 + 2 = \underline{\hspace{2cm}}$$

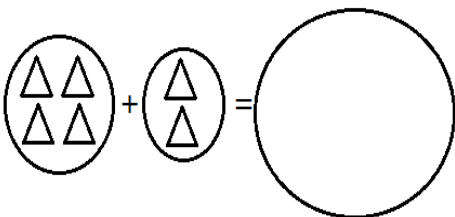
3. Circle the smaller number

7 or 2

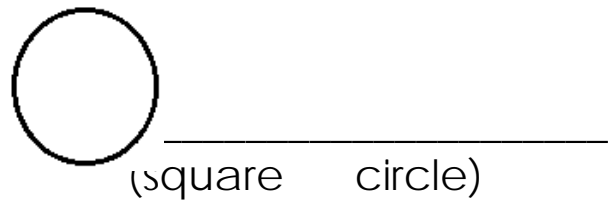
4. Write the number symbol

nine = _____

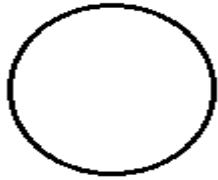

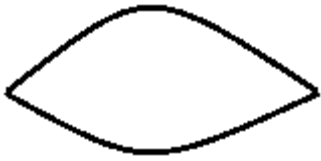
5. Join the sets.



6. Name the shape.



18. Name the shapes.



(circle triangle rectangle oval zigzag square)

19. Match correctly.

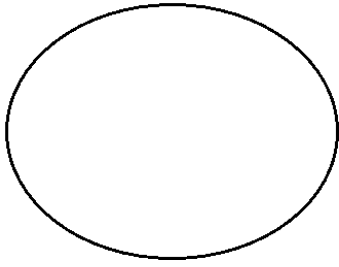
10	twelve
7	six
6	ten
12	seven

20. Fill in the missing number.

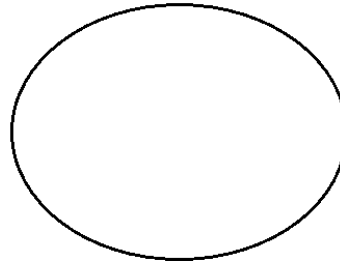
14, 15, _____, 17, 18, _____, _____, 21, 22, _____, 24

21. Draw these sets.


A set of 4 books.



A set of 2 houses.




22. Count and write in words.

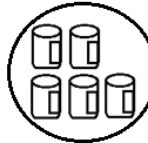
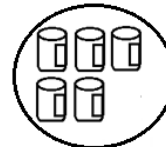


= _____

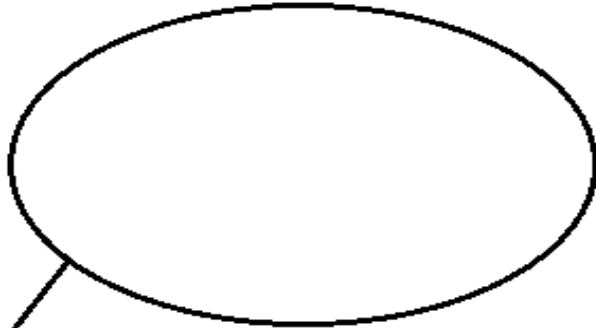


= _____

2  are same things.

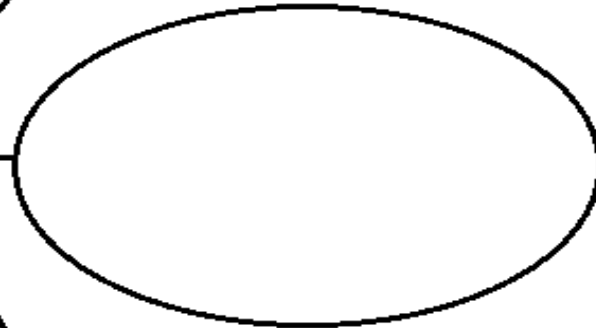


24. Make new sets.

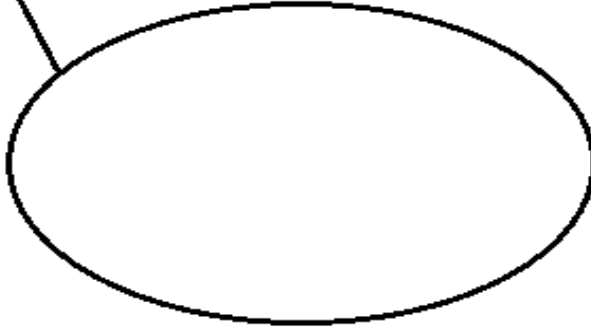


A set of

A set of



A set of



*******GOD BLESS*******