



MULAGO

CREAMHILL SCHOOLS – MULAGO

P.3
LITERACY 1A

Name: _____ Stream _____

SECTION A

1. Give any one symbol of a school.

2. What is wind?

3. Name this item made from local materials.



4. Write any one important place in a community.

5. Give one reason why animals move.

6. In which direction does the sun rise?

7. Give any one example of domestic animals.

8. In which place can we keep our money safely?

9. Mention any one mean of road transport.

10. Give one reason why we eat food.

11. Name the map symbol below.



12. Who heads a family?

13. Name the body organ used for seeing.

14. Which animal gives us meat and milk?

15. Write one item made using animal skins.

16. What is the work of a nurse at school?

17. On which body part of an insect are legs found?

18. Name the animal that provided security.

19. Which food do we get from bees?

20. Give one basic need of a family.

21. How can we keep our bodies clean?

22. Why should we boil water for drinking?

23. Mention any one month in a year.

24. What name is given to a young plant?

25. Write L.C in full.

26. Name the largest lake in Uganda.

27. Which part of a plant is shown below?



28. Give any one re-creative activity.

29. Name one place where we can get food from.

30. Write one wild animal.

31. Who keeps law and order in a town council / division?

32. What is a home?

33. Give any one right of children.

34. State one use of water at school.

35. What name is given to the mixture of gases?

36. Give one example of a domestic bird.

37. How do we care for plants?

38. In which season do farmers plant their crops?

39. Name this item used to clean our body.



40. What is the main source of water?

SECTION B



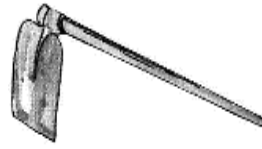

41. (a) Write two tools used for keeping peace and security.
(i) _____
(ii) _____
- (b) Write two activities children do at school.
(i) _____
(ii) _____
42. (a) Give any two elements of weather.
(i) _____

(ii) _____

(b) Write the two seasons in a year.

(i) _____ (ii) _____

43. Name these garden tools.

44. Match the animal to its meat.

pig

beef

cow

mutton

hen

pork

sheep

chicken

45. (a) _____ is a sudden happening which causes injuries or death.



(b) Write three examples of common accidents at home.

(i) _____

(ii) _____

(iii) _____

46. (a) Name these objects made from timber.

(b) Name the person who makes things from wood.

(c) Give the name of the place where furniture is made.

47. (a) In which town council is your school found?

(b) Name two parishes found in our town council / division.

(i) _____

(ii) _____

(c) Write down one member on the L.C 1 committee.

48. Write down any four parts found on the head.

(i) _____ (ii) _____

(iii) _____ (iv) _____

49. (a) What name is given to an object drawn as seen from above?

(b) Write any two elements of a good map.

(i) _____

(ii) _____

(c) Name this map symbol.



50. **Match animals to their habitats.**

Bees

kennel

Cow

hive

Rabbit



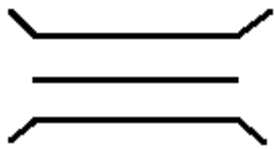
kraal

Dog

hutch

51. (a) Mention one animal used for transport.

(b) Name the road signs below.

52. (a) Write any two plants found in your school compound.
(i) _____
(ii) _____

(b) What do plants need to grow well?
(i) _____
(ii) _____

53. (a) Write down any two examples of physical features.
(i) _____
(ii) _____

(b) Name two physical features that provide water.
(i) _____
(ii) _____

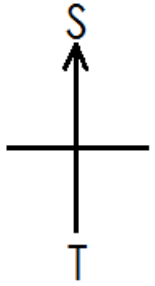
54. Write **true** or **false**
(a) We go to school to learn.

(b) The work of a head teacher is to preach.

(c) A dog is a domestic animal.

(d) Our school is found in Ka district.

55. (a) Name the cardinal points marked T and S.



S _____

T _____

(b) Write two people who use a compass.
(i) _____
(ii) _____