



MULAGO

CREAMHILL SCHOOLS – MULAGO

SOCIAL STUDIES & RE


P.4

SECTION A

1. Name the animal that is a source of beef.

2. How useful is a key to a map reader?

3. In the space below. Draw the map of a tree.



4. Which tribe in Uganda speaks Luganda?

5. How many members make up the local council one committee?

6. In which district is your school found?

7. Give a reason for having humps on roads.

8. Name one product got from forests.

9. Under which type of weather can we use the item?



shutterstock.com • 1317660785

10. Name the commonest type of transport.

11. State the reason for building hospitals in the community.

12. Mention one way we practice our culture as children.

13. How can our classrooms be kept clean?

14. Who is a child in our community?

15. Give one reason why people visit banks.

16. How useful is a kitchen in a school?

17. Write the title of the political head of Kampala city.

18. Why do people take care of domestic animals?

19. In which direction does the sun appear to rise?

20. **Why is the item below not commonly used in villages?**



21. Name the physical feature that covers the largest part of our district.

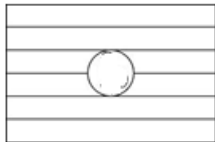
22. Of what importance are doctors in the community?

23. Give a reason why all pupils in your school are encouraged to be on uniform.

24. Mention one way of making our school compound beautiful.

25. Why do we need class rules and regulations?

26. **Name the country whose flag is shown below?**



27. Name one district found in Central Uganda.

28. Write one of the types of weather in the community.

29. State one way the community is helpful to the to the school.

30. Give a reason why some tribes keep donkeys.

31. Which symbol of a school helps a child to tell the names of the school?

32. How important is the tool below in a classroom?



33. Name the fastest type of transport.

34. State one cause of accident within a school setting.

35. In the space below, draw and name any one tool used in keeping security in the community.



For questions 36 – 40, answer either Christianity or Islamic questions but not both alternatives in the same number.

36. **Either:** a) Name the Holy book for Christians.

Or:b) Name the Holy book for Muslims.

37. **Either:** State one group of people that need our prayers.

Or:State one group of people that Muslim pray for.

38. **Either:**How long did God take to create the universe?

Or:How long did Allah take to create the universe?

39. **Either:** Mention one effect of Adam and Eve's sin to the world.

Or:Mention one effect of Adam and Hawa's in to the world.

40. **Either:**Give a reason why God saved Noah from death.

Or:Give a reason why Allah saved Prophet Nuhu.

SECTION B

41. **Match the following people to their work in the community.**

A	B
i)Teacher	Prepares food for people.
ii) Secretary	Provides education services.
iii) Cook	Protects people from danger.
iv) Security officer	Types work for leaners.

42. a) Give one reason why a child should belong to a family.

b) Mention any one responsibility of a child in a home.

c) State any two causes of child abuse in the community.

i) _____

ii) _____

43. a) Who are the political leaders?

b) Give two reasons why we need leaders in the community.

i) _____

ii) _____

c) Apart from political leaders, name any other type of leaders you know.

44. In the space provided below, draw the map symbols.

swamp	river	mountain	dam

45. a) Mention two elements of weather studied at a weather station.

i) _____

ii) _____

b) Which type of weather is the best for winnowing?

c) Which activity do farmers do in the wet season?

46. a) Complete the table below sensibly.

Service	Service centre
Education	_____
_____	Police station
Health care	_____

b) Mention one problem faced by government while providing the above service.

47. a) In which two ways is a school important to the community?

i) _____

ii) _____

b) List any two places within a school where games and sports activities can take place.

i) _____

ii) _____

48. a) What are physical features?

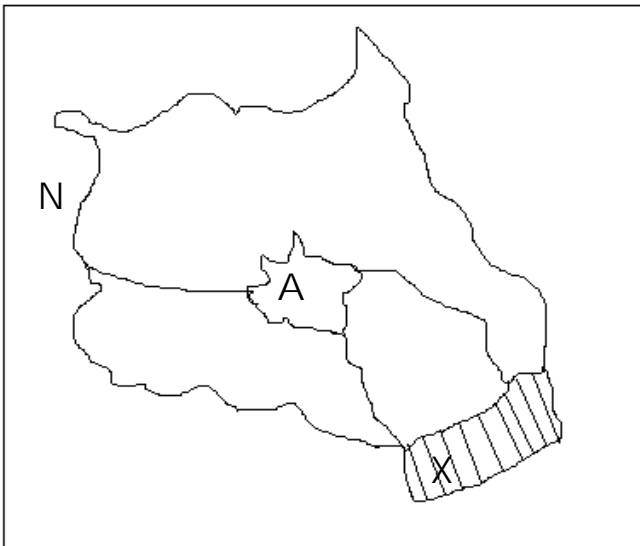
b) Which land form covers the largest part of our district?

c) Give any two uses of lakes in our district.

i) _____

ii) _____

49. Study the map of Kampala and answer the questions that follow.



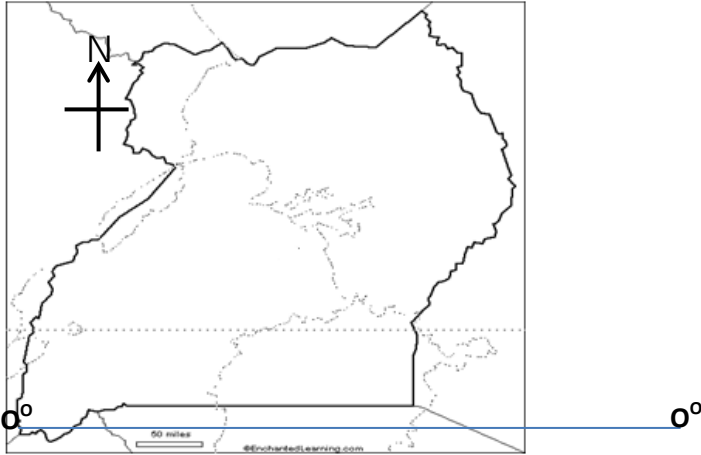
a) Name the lake marked X _____

b) Mention the smallest division marked A _____

c) Which neighbouring district of Kampala is labeled N.

d) Mention one important place in the division marked A.

50. Study the map below and answer the questions that follow.



a) Name the country shown on the a map.

b) Which line of latitude is marked 0°?

c) Identify any two element of a good shown on the map.

i) _____

ii) _____

For questions 51 – 55, answer either Christianity or Islamic question but not both alternatives in the same number.

51. **Either:**a) Who created the universe? _____

b) From what material was man made? _____

c) Give two reasons for creating

man.i) _____

ii) _____

Or: a) Who created the universe according to Islam? _____

b) From what material was man created? _____

c) Give two reasons for creating man.

i) _____

ii) _____

52. **Either:** a) State one reason why God blessed Abraham.

b) Name one of the sons of Abraham _____

c) Which two lessons do we learn from the acts of Abraham?

i) _____

ii) _____

Or: a) State one reason why Allah blessed Ibrahim.

b) Name one of the sons of Ibrahim _____

c) Which two lessons do we learn from Prophet Ibrahim?

i) _____

ii) _____

53. **Either: Arrange the following books according to where they are found.**

i) Exodus ii) Mark iii) Acts iv) Genesis

Old Testament.

i) _____ ii) _____

New Testament.

i) _____ ii) _____

Or: Match the following correctly.

Books	Prophet
Tauret	Mohammed
InjirDauda	
Quran	Musa
Zabur	Isa

54. **Either:** a) Name the prayer that Jesus taught His disciples.

b) Give any two reasons why Christians pray.

i) _____

ii) _____

c) How important is the church to Christians?

Or: a) What special name is given to prayer in Islam?

b) Give two reasons why Muslims pray.

i) _____

ii) _____

c) How important is a Mosque to Muslims?

55. **For Both:**

a) Write any two ways of caring for ourselves.

i) _____

ii) _____

b) Give two reasons why we should care for our bodies.

i) _____

ii) _____

End

RELIGIOUS EDUCATION

Answer either Christianity or Islamic questions but not both alternatives in the same number.

1. **Either:** Who was the earthly father of Jesus Christ?

Or: Who was the father of Prophet Mohammed (PBUH)?

2. **Either:** Give one way a P.4 child can use his/her mouth to serve God.

Or: Give one way a P.4 child can use his / her mouth to serve Allah.

3. **Either:** What is sin according to Christianity?

Or: What is sin according to Islam?

4. **Either:** Write down one fruit of the Holy Spirit.

Or: Mention the role of a Muazzin in the Mosque.

5. **Either:** Name the Holy book for Christians.

Or: Name the Holy book for Muslims.

6. **Either:** Identify any one miracle performed by Jesus.

Or: Identify any one miracle performed by Prophet Mohammed.

7. **Either:** What is Lent?

Or: What is Saum?

8. **Either:** In which section of the Bible do we find the story of creation?

Or: Who received the Quran according to Islam?

9. **Either:** Name the person who built the ark.

Or: Name the person who built the Kaaba.

10. **Either:** State one reason why Christians pray.

Or: State one reason why Moslems pray.

11. **Either:** Give any one example of a Christian leader.

Or: Give any one example of an Islamic leader.

12. **Either:** Identify any one apostle of Jesus.

Or: Identify any one caliph of Prophet Mohammed. (PBUH)

13. **Either:** Why was Jesus sent on earth?

Or: Why was Prophet Mohammed sent on earth?

14. **Either:** How can a Christian child show love to His / her fellow pupil?

Or: How can a Muslim child show love to His / her fellow pupil?

15. **Either: Draw and name one symbol of Christianity.**



Or: Draw and name one symbol of Islamic faith.



16. **Either:** What should a good Christian do after sinning?

Or: What should a good Muslim do after sinning?

17. **Either:** On which day do Christians celebrate the birth of Jesus Christ?

Or: On which day do Muslims celebrate Idd-Aduha.

18. **Either:** Which animal tempted Eve to eat the forbidden fruit?

Or: Which animal tempted Hawa to eat the forbidden fruit?

SECTION B

19. **Either:** a) How many days did the process of creation take?

b) Give a reason why God created man.

c) In which one way does man care for God's creation today?

d) **Draw and name one thing God created to give us light.**

Or: a) a) How many days did the process of creation take?

b) Give a reason why Allah created man.

c) In which one way does man care for Allah's creation today?

d) **Draw and name one thing Allah created to give us light.**

20. **Either:** a) Who built the boat to save God's people during the flood?

b) What name was given to the above boat?

c) **Draw and name any two animals that entered the above boat.**

Or: a) Who built the boat to save God's people during the flood??

b) What name was given to the above boat?

c) **Draw and name any two animals that entered the above boat.**

21. **Either:** a) Identify the first book in the Bible.

b) How important is the Bible to Christians?

c) Give any two reasons why Christians read the Bible.

i) _____

ii) _____

Or: a) Identify one pillar in Islam.

b) How important are these pillars to Muslims?

c) Give any two reasons why Muslims should follow their pillars.

i) _____

ii) _____

22. **Either:** a) How many Apostles did Jesus have?

b) Identify any two of the above Apostles.

i) _____ ii) _____

c) Which Apostle denied Jesus three times?

Or: a) Who were the caliphs?

b) Identify any two of the caliphs of prophet Mohammed.

i) _____ ii) _____

c) Give one importance of caliphs in the spread of Islam.

23. **Either:** a) Who received the ten commandments?

b) On which mountain were the Ten Commandments received?

c) Write any two of the Ten Commandments.

i) _____

ii) _____

Or:a) Who received the Tauret?

b) On which mountain was the Tauret received?

c) Mention any other two books in Islam.

i) _____

ii) _____

24. **Either: Match list A to list B correctly.**

List A	List B
Samuel	rock
Moses	God is with us.
Peter	asked from God.
Emmanuel	picked from water.

Or: Match list B correctly.

List A	List B
Abdullah	first wife to Mohammed.
Aminah	first caliph to Mohammed.
Khadijah	mother to Mohammed.
Abubakar	father to Mohammed.

25. **Either:** a) Mention any two problems faced by Christians today.

i) _____

ii) _____

b) How can Christians solve the above problems?

i) _____

ii) _____

Or: a) Mention any two problems faced by Muslims today.

i) _____

ii) _____

b) How can Muslims solve the above problems?

i) _____

ii) _____

26. For Both:

a) Who is a leader?

b) Identify any three qualities of a good leader.

i) _____

ii) _____

iii) _____

END