



CREAMHILL SCHOOLS – MULAGO

P.6

SOCIAL STUDIES & RE

SECTION A

1. Name the African country that tried to colonies Uganda.

2. Write EAC in full.

3. Why is a grass thatched house called a temporary house?

4. Which element of a good map helps in finding the actual ground distance represented on a map?

5. State one importance of the Nile river to the people of Uganda.

6. Mention one neighbour of Uganda that is landlocked.

7. How does the police force help courts of law to do their work?

8. Give a reason why swamp drainage is discouraged in Uganda today.

9. Apart from communication, how else do people use the tool below?



10. Which arm of government is headed by the chief justice?

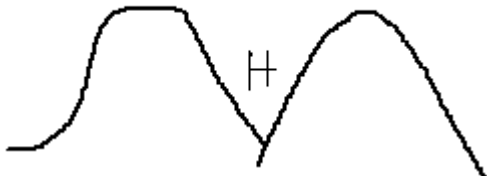
11. Why is Nyero Stone Age site famous in Uganda?

12. State one lesson that you learn from the legend of the spear and the bead.

13. Why is 9th October a very important day in Uganda?

14. State the main reason for growing cash crops in your community?

15. **Suggest one problem that is faced by people living in area marked H**



16. Why do farmers plant their seeds at the beginning of the rainy season?

17. Mention the type of weather that breaks trees in the environment.

18. **Draw a map symbol of a waterfall in the space below.**



19. Give one reason why IBEA Co was formed.

20. Why are game parks regarded as important resources in Uganda?

21. Where are school children who are sick encouraged to visit within the school?

22. If the time at the Greenwich is 2:00pm. Find the time in Kampala 45° East of Greenwich.

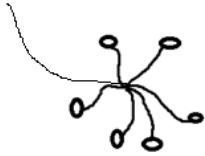
23. How are radios important to traders in a country?

24. Why does the Uganda court of Arms have pictures coffee and cotton crops?

25. How was the Namirembe Agreement important to Sir Edward Muteesa II?

26. Write any one form of child abuse in Uganda today.

27. **How helpful was the tool below to the early man?**



28. Name one memberstate of the EAC that is not crossed by the Equator line.

29. Why are areas around Mountain Mufumbiro settled by many people?

30. State the importance of the national symbol below.



31. In which one way is rainfall regarded as a curse in some communities?

32. Why is it good for countries to cooperate with each other?

33. State one role of the RDC in a district.

34. Why are children encouraged to participate in Music, dance and drama activities in your school?

35. Mention one way the local people benefited from indirect rule.

For questions 36 – 40, answer either Christianity or Islamic question but not both alternatives in the same number.

36. **Either:** Name the material God used to make man.

Or: Name the material Allah used to create man.

37. **Either:** Write down the first commandment God gave to Moses.

Or: Write down the first pillar of Islam.

38. **Either:** In the space below draw a symbol for a Christian family.



Or: In the space below, draw a symbol an Islamic family.



39. **Either:** State any one promise that God made to Abraham.

Or: State any one promise that Allah made to Prophet Ibrahim.

40. **For Both:** How were human beings created special from other creatures?

SECTION B

41. a) John earns a salary of shs. 200,000, and spends all his money in addition to borrowing more from the bank.

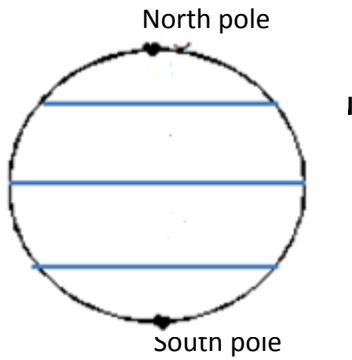
a) Name the type of budget that John uses.

b) Write down the income that is on John's budget.

c) Give one disadvantage of John's budget.

d) Suggest any piece of advice that you can give to John.

42. Use the diagram below to answer question No. 42



a) Name the lines of latitude marked;

A _____ C _____

b) Why is the line marked A always marked 0° ?

c) State the importance of latitudes on a map.

43. a) List down any two local materials in the environment that can be used to make crafts.

i) _____

ii) _____

b) Mention one use of craft items in the environment.

c) In which one way have people benefited from making crafts?

44. Study the map of East Africa and answer question No. 44.



a) Name the countries of East Africa marked;

A _____ B _____

b) How many countries of East Africa share the lake marked X on the map?

c) Use letter Y to show the Indian Ocean on the map above.

45. a) State any two ways leaders are chosen in your country.

i) _____

ii) _____

b) In which one way are religious leaders important in your community?

c) Mention one problem faced by our leaders in the community.

46. a) Name any two of the founder presidents of EAC in 1967.

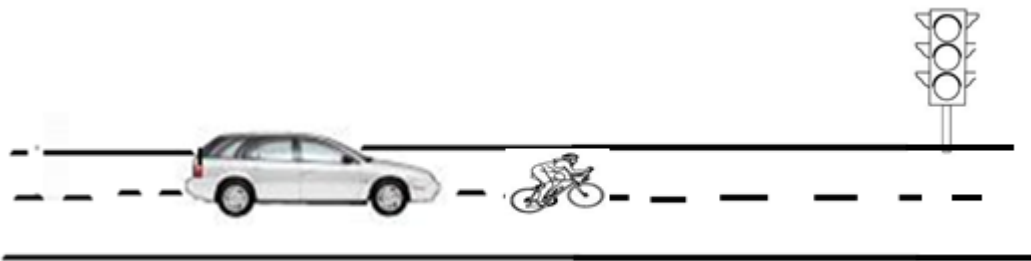
i) _____

ii) _____

b) Give one reason for the formation of the EAC in 1967.

c) State one reason why EAC collapsed in 1977.

47. Study the picture below and use it to answer question No. 47.



the above

facility well?

b) State any one road safety measure that can reduce on accidents.

c) Give one way of caring for the facility represented in the diagram above.

d) Write down any one group of road users in Uganda today.

48. a) State the two major aspects of climate.

i) _____ ii) _____

b) Give one reason why North Eastern Uganda receives little rainfall.

c) Mention the weather instrument that is used to measure the speed of wind at a weather station.

49. a) Name the largest ethnic group in Uganda.

b) Give two reasons why the ethnic group mentioned above migrated to Uganda.

i) _____

ii) _____

c) State one problem that ethnic groups faced in the places where they settled.

50. a) Write down any two local leaders in Uganda that resisted colonial rule.

i) _____

ii) _____

b) Which group of foreigners did the above traditional leaders resist?

c) In which one way did Ugandans benefit from foreigners?

For questions 51 – 55, answer either Christianity or Islamic questions but not both alternatives in the same number.

51. **Either:** a) Mention the first two human beings that God created.

i) _____

ii) _____

b) In which way was the creation of Adam different from that of Eve?

c) Apart from taking care of His creation, give another reason for creating man.

Or: a) Mention the first two human beings that Allah created.

i) _____

ii) _____

b) In which way was the creation of Adam different from that of Hawa?

c) Apart from taking care of His creation, give another reason for creating man.

52. **Either:** a) Name the sacrament one receives to become a Christian.

b) State any one thing that is used during the above sacrament.

c) Give two importance of the Holy spirit to Christians today.

i) _____

ii) _____

Or: a) Mention one practice that is done to male Muslims when they are converted to Islam.

b) State one reason why Muslim males carry out the practice mentioned in a) above.

c) Mention two ways Allah is important to Muslim families.

i) _____

ii) _____

43. **Either:** a) Name any two of the closest apostles of Jesus Christ.

i) _____

ii) _____

b) Give one reason why Jesus had apostles.

c) How did Jesus complete His mission on earth?

Or: a) Name any two caliphs of Prophet Mohammed.

i) _____

ii) _____

b) Give one reason why Mohammed had caliphs.

c) How did Mohammed (PBUH) prove that He was a messenger of Allah?

54. **Either:** a) Why is prayer considered as an important practice among Christians?

b) Mention any two types of prayers.

i) _____

ii) _____

c) State one reason why God may not answer somebody's prayer.

Or: a) Why is prayer / Salat considered as an important pillar among Muslims?

b) Mention any two suitable places for salat among Muslims.

i) _____

ii) _____

c) State one reason why Allah may not answer a Muslim's prayer.

55. For Both:

a) Who is a good friend?

b) In which two ways can a P.6 child prove to others that they are good friends?

i) _____

ii) _____

c) State any one behaviour that may break relationships among people.

RELIGIOUS EDUCATION

1. **Either:** Name any one symbol of a Christian family.

Or: Name any one symbol of a Christian family.

2. **Either:** Mention any one commandment God gave to Christians through Moses.

Or: State any one pillar of Islam.

3. **Either:** Give any one way Christians communicate to God.

Or: Give any one Muslims communicate to God.

4. **Either:** What did Jesus give in exchange for saving mankind?

Or: Which Holy book was revealed to Prophet Isa?

5. **Either:** Where did Adam and Eve live before disobeying God?

Or: Where Adam and Hawa live before disobeying Allah?

6. **Either:** What is Lent in Christianity?

Or: What is Saum among Muslims?

7. **Either:** State any one way in which Abraham demonstrated his strong faith in God.

Or: State one way in which Prophet Ibrahim showed his faith in Allah.

8. **Either:** Mention any lesson a Christian should learn from Jesus' life when He was still a child.

Or: What lesson should a Muslim child learn from Prophet Mohammed when He was still a child?

9. **Either:** State the greatest commandment that was taught by Jesus Christ.

Or: State the greatest pillar in Islamic faith.

10. **Either:** Why should a Christian child forgive other people?

Or: Why should a Muslim child forgive other people?

11. **Either:** Mention the day that marks the end of fasting among Christians.

Or: Mention the celebration that marks the end of Ramadhan.

12. **Either:** Give one way a Christian child can overcome temptation.

Or: Mention one way a Muslim child can overcome temptation.

13. **Either:** What name is given to the first five books in the Bible?

Or: What name is given to the first Surat?

14. **Either:** Mention the town where Jesus Christ was buried.

Or: Mention the town where Prophet Mohammed was buried.

15. **Either:** Why was the crucifixion of Jesus Christ important to Christians?

Or: Why is Prophet Mohammed a very important messenger in Islam?

16. **Either:** Why is baptism important in Christianity?

Or: Why is circumcision taken to be an important act in Islam?

17. **Either:** Name one Christian denomination you know.

Or: Name one Islamic denomination you know.

18. **Either:** How useful was Simon of Cyrene to Jesus Christ?

Or: How useful was Abu-Talib to Prophet Mohammed?

SECTION B

19. **Either:** Write down four sacraments in Christianity.

i) _____ iii) _____

ii) _____ iv) _____

Or: Write down any four of the compulsory prayers a true Muslim should have to perform in a day.

i) _____ iii) _____

ii) _____ iv) _____

20. **Either: Match correctly.**

List A

- i) Good Friday
- ii) Ascension day
- iii) Easter Sunday
- iv) Ash Wednesday

List B

- The day Jesus resurrected
- marks the beginning of lent
- The day Jesus went back to heaven
- the day Jesus was crucified

Or: Either: Match correctly.

List A

- i) Aminah
- ii) Summayah
- iii) Abubakar
- iv) Khadija

List B

- caliph of Prophet Mohammed
- wife of Prophet Mohammed
- first martyr in Islam
- Prophet Mohammed' mother

21. **For Both:**

a) Give two reasons why people should live in good relationship with one another.

i) _____

ii) _____

b) Mention any two groups of people children relate with.

i) _____

ii) _____

22. **For Both:**

a) What is prayer?

b) State any three reasons why Muslims / Christians pray to God / Allah.

i) _____

ii) _____

iii) _____

23. **For Both:** a) What is work?

b) Mention the two types of work.

i) _____

ii) _____

c) State any one problem people may experience while at work.

24. **For both:** a) What does the term Adolescence mean?

b) Give any three unique characteristics that appear among adolescent boys and girls.

i) _____

ii) _____

iii) _____

25. **For both:** a) What is suffering?

b) What was the origin of suffering in the world?

c) Give any two effects of spiritual suffering.

i) _____

ii) _____

26. **Either:** a) What are parables?

b) Write down two parables Jesus used while teaching.

i) _____

ii) _____

c) Give any reason why Jesus used in His teaching.

Or: a) What is Hadith?

b) Write down any two Hadith Prophet Mohammed used while teaching the word of Allah.

i) _____

ii) _____

c) Why did Prophet Mohammed use Hadith while teaching?

END

